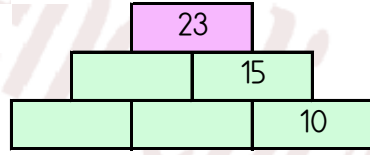
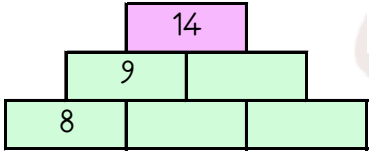
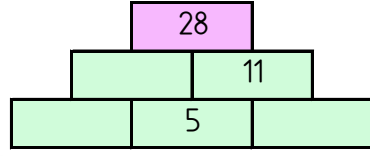
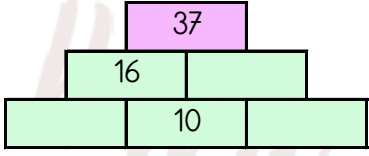


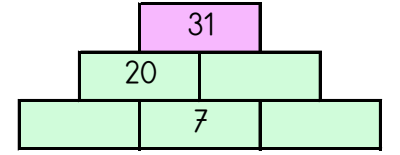
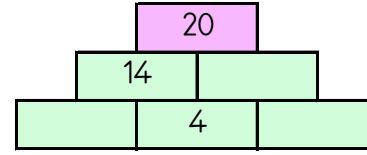
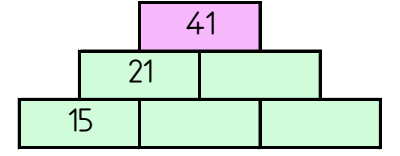
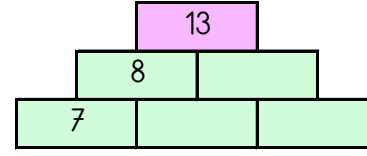
### TOPLAMA PİRAMİDİNDE VERİLMİYEN SAYILAR

Toplama piramidi üzerinde bazı sayılar verilmemiştir. Bunları bulabilir misin?



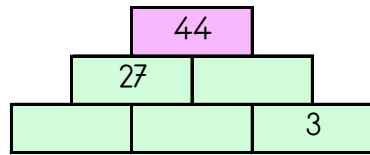
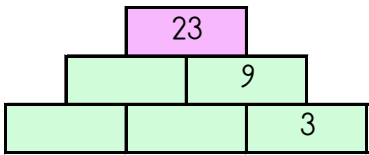
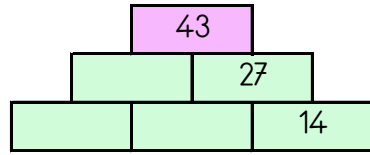
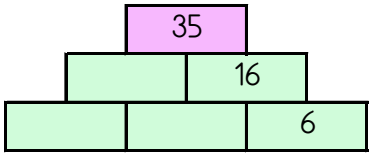
### TOPLAMA PİRAMİDİNDE VERİLMİYEN SAYILAR

Toplama piramidi üzerinde bazı sayılar verilmemiştir. Bunları bulabilir misin?



### TOPLAMA PİRAMİDİNDE VERİLMİYEN SAYILAR

Toplama piramidi üzerinde bazı sayılar verilmemiştir. Bunları bulabilir misin?



### TOPLAMA PİRAMİDİNDE VERİLMİYEN SAYILAR

Toplama piramidi üzerinde bazı sayılar verilmemiştir. Bunları bulabilir misin?

