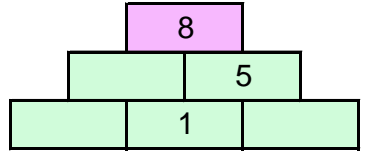
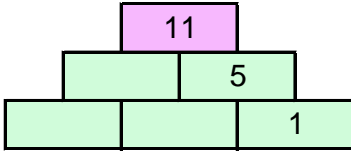
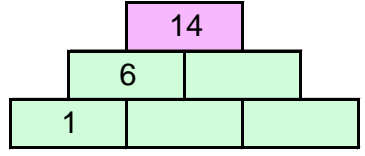
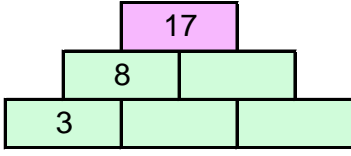


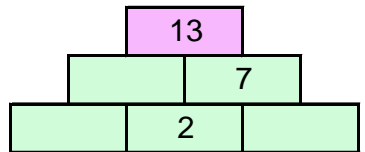
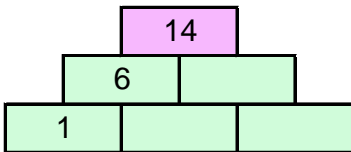
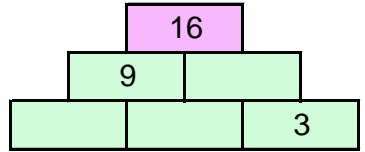
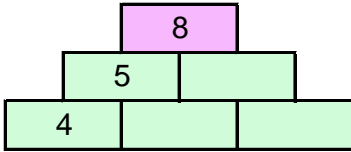
## TOPLAMA PİRAMİDİNDE VERİLMİYEN SAYILAR

Toplama piramidi üzerinde bazı sayılar verilmemiştir. Bunları bulabilir misin?



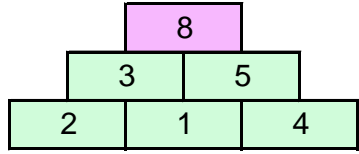
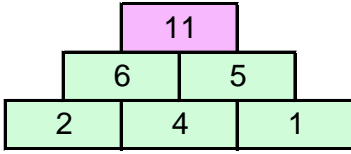
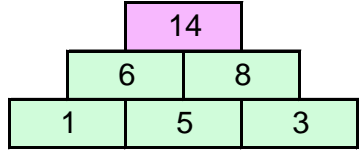
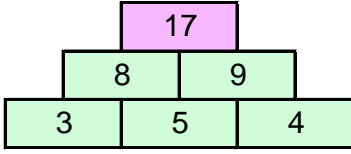
## TOPLAMA PİRAMİDİNDE VERİLMİYEN SAYILAR

Toplama piramidi üzerinde bazı sayılar verilmemiştir. Bunları bulabilir misin?



## TOPLAMA PİRAMİDİNDE VERİLMİYEN SAYILAR

Toplama piramidi üzerinde bazı sayılar verilmemiştir. Bunları bulabilir misin?



## TOPLAMA PİRAMİDİNDE VERİLMİYEN SAYILAR

Toplama piramidi üzerinde bazı sayılar verilmemiştir. Bunları bulabilir misin?

