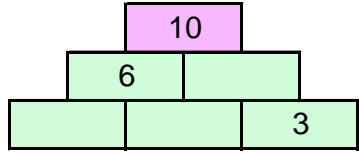
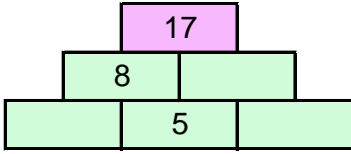
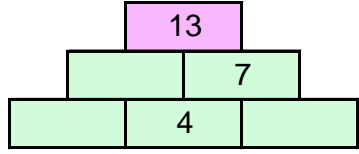
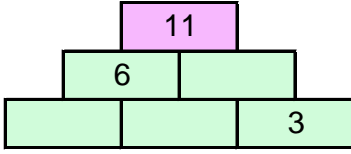


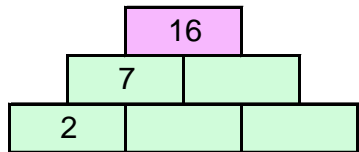
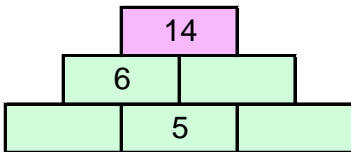
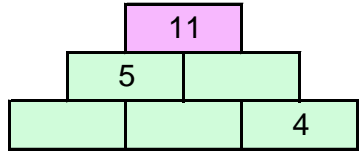
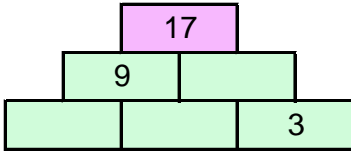
TOPLAMA PİRAMİDİNDE VERİLMİYEN SAYILAR

Toplama piramidi üzerinde bazı sayılar verilmemiştir. Bunları bulabilir misin?



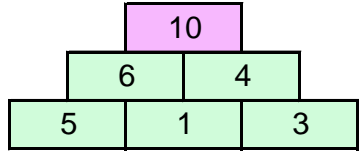
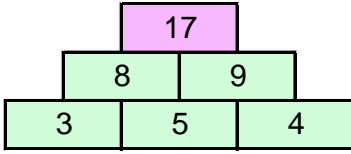
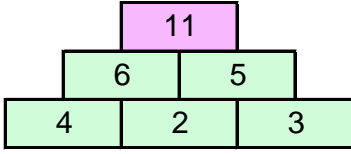
TOPLAMA PİRAMİDİNDE VERİLMİYEN SAYILAR

Toplama piramidi üzerinde bazı sayılar verilmemiştir. Bunları bulabilir misin?



TOPLAMA PİRAMİDİNDE VERİLMİYEN SAYILAR

Toplama piramidi üzerinde bazı sayılar verilmemiştir. Bunları bulabilir misin?



TOPLAMA PİRAMİDİNDE VERİLMİYEN SAYILAR

Toplama piramidi üzerinde bazı sayılar verilmemiştir. Bunları bulabilir misin?

