



## VAGONLARI DOLDUR

Son vagonda verilen sayıdan başlayıp verilen işlemleri yaparak bütün vagonları doldurabilir misin? Her trende son bulduğun vagonu aşağıdan işaretlemelisin.

$$8 \xrightarrow{-3} \square \xrightarrow{-4} \square \xrightarrow{+7} \square \xrightarrow{+4} \square \xrightarrow{-3} \square \xrightarrow{-4} \square$$


$$11 \xrightarrow{+2} \square \xrightarrow{+4} \square \xrightarrow{+2} \square \xrightarrow{-7} \square \xrightarrow{-9} \square \xrightarrow{-2} \square$$


$$5 \xrightarrow{+4} \square \xrightarrow{+2} \square \xrightarrow{-5} \square \xrightarrow{+3} \square \xrightarrow{-6} \square \xrightarrow{+5} \square$$



$$12 \xrightarrow{+10} \square \xrightarrow{-8} \square \xrightarrow{+5} \square \xrightarrow{+3} \square \xrightarrow{-10} \square \xrightarrow{+7} \square$$


19                      5                      9                      8                      1


## VAGONLARI DOLDUR

Son vagonda verilen sayıdan başlayıp verilen işlemleri yaparak bütün vagonları doldurabilir misin? Her trende son bulduğun vagonu aşağıdan işaretlemelisin.

$$7 \xrightarrow{-5} \square \xrightarrow{+8} \square \xrightarrow{+6} \square \xrightarrow{+6} \square \xrightarrow{-7} \square \xrightarrow{-10} \square$$


$$11 \xrightarrow{+9} \square \xrightarrow{-2} \square \xrightarrow{-6} \square \xrightarrow{-2} \square \xrightarrow{-3} \square \xrightarrow{+9} \square$$


$$5 \xrightarrow{-2} \square \xrightarrow{-1} \square \xrightarrow{-1} \square \xrightarrow{+7} \square \xrightarrow{+9} \square \xrightarrow{+5} \square$$


$$5 \xrightarrow{-1} \square \xrightarrow{+9} \square \xrightarrow{-7} \square \xrightarrow{-2} \square \xrightarrow{+5} \square \xrightarrow{+4} \square$$


13                      5                      22                      7                      16

## VAGONLARI DOLDUR

Son vagona verilen sayıdan başlayıp verilen işlemleri yaparak bütün vagonları doldurabilir misin? Her trende son bulduğun vagonu aşağıdan işaretlemelisin.

$$\boxed{8} \xrightarrow{-3} \boxed{\phantom{00}} \xrightarrow{-4} \boxed{\phantom{00}} \xrightarrow{+7} \boxed{\phantom{00}} \xrightarrow{+4} \boxed{\phantom{00}} \xrightarrow{-3} \boxed{\phantom{00}} \xrightarrow{-4} \boxed{\phantom{00}} \rightarrow 5$$

$$\boxed{11} \xrightarrow{+2} \boxed{\phantom{00}} \xrightarrow{+4} \boxed{\phantom{00}} \xrightarrow{+2} \boxed{\phantom{00}} \xrightarrow{-7} \boxed{\phantom{00}} \xrightarrow{-9} \boxed{\phantom{00}} \xrightarrow{-2} \boxed{\phantom{00}} \rightarrow 1$$

$$\boxed{5} \xrightarrow{+4} \boxed{\phantom{00}} \xrightarrow{+2} \boxed{\phantom{00}} \xrightarrow{-5} \boxed{\phantom{00}} \xrightarrow{+3} \boxed{\phantom{00}} \xrightarrow{-6} \boxed{\phantom{00}} \xrightarrow{+5} \boxed{\phantom{00}} \rightarrow 8$$

$$\boxed{12} \xrightarrow{+10} \boxed{\phantom{00}} \xrightarrow{-8} \boxed{\phantom{00}} \xrightarrow{+5} \boxed{\phantom{00}} \xrightarrow{+3} \boxed{\phantom{00}} \xrightarrow{-10} \boxed{\phantom{00}} \xrightarrow{+7} \boxed{\phantom{00}} \rightarrow 19$$

19                      5                      9                      8                      1

## VAGONLARI DOLDUR

Son vagona verilen sayıdan başlayıp verilen işlemleri yaparak bütün vagonları doldurabilir misin? Her trende son bulduğun vagonu aşağıdan işaretlemelisin.

$$\boxed{7} \xrightarrow{-5} \boxed{\phantom{00}} \xrightarrow{+8} \boxed{\phantom{00}} \xrightarrow{+6} \boxed{\phantom{00}} \xrightarrow{+6} \boxed{\phantom{00}} \xrightarrow{-7} \boxed{\phantom{00}} \xrightarrow{-10} \boxed{\phantom{00}} \rightarrow 5$$

$$\boxed{11} \xrightarrow{+9} \boxed{\phantom{00}} \xrightarrow{-2} \boxed{\phantom{00}} \xrightarrow{-6} \boxed{\phantom{00}} \xrightarrow{-2} \boxed{\phantom{00}} \xrightarrow{-3} \boxed{\phantom{00}} \xrightarrow{+9} \boxed{\phantom{00}} \rightarrow 16$$

$$\boxed{5} \xrightarrow{-2} \boxed{\phantom{00}} \xrightarrow{-1} \boxed{\phantom{00}} \xrightarrow{-1} \boxed{\phantom{00}} \xrightarrow{+7} \boxed{\phantom{00}} \xrightarrow{+9} \boxed{\phantom{00}} \xrightarrow{+5} \boxed{\phantom{00}} \rightarrow 22$$

$$\boxed{5} \xrightarrow{-1} \boxed{\phantom{00}} \xrightarrow{+9} \boxed{\phantom{00}} \xrightarrow{-7} \boxed{\phantom{00}} \xrightarrow{-2} \boxed{\phantom{00}} \xrightarrow{+5} \boxed{\phantom{00}} \xrightarrow{+4} \boxed{\phantom{00}} \rightarrow 13$$

13                      5                      22                      7                      16