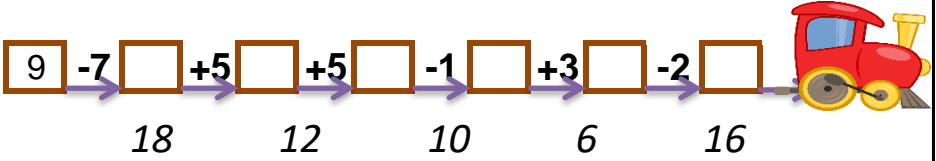
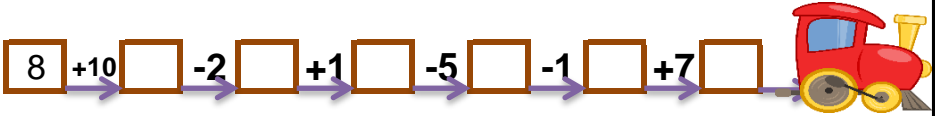
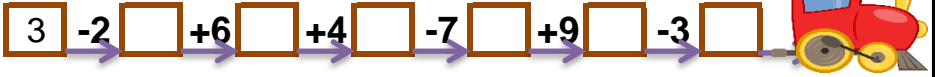


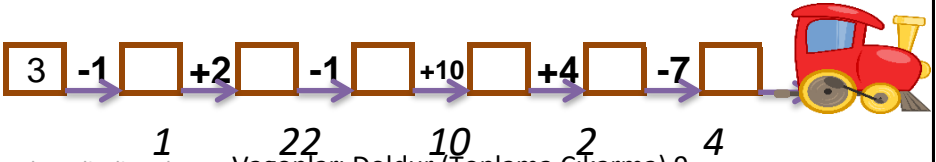
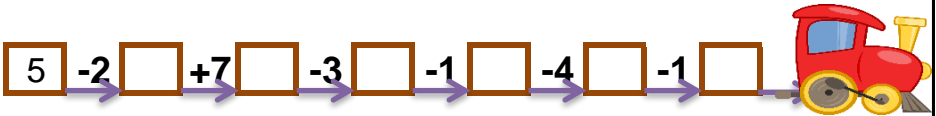
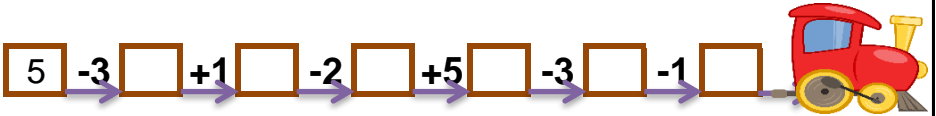
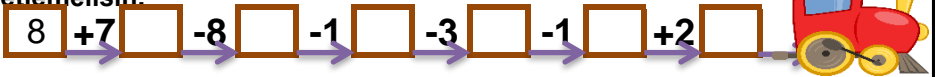
VAGONLARI DOLDUR

Son vagonda verilen sayıdan başlayıp verilen işlemleri yaparak bütün vagonları doldurabilir misin? Her trende son bulduğun vagonu aşağıdan işaretlemelisin.



VAGONLARI DOLDUR

Son vagonda verilen sayıdan başlayıp verilen işlemleri yaparak bütün vagonları doldurabilir misin? Her trende son bulduğun vagonu aşağıdan işaretlemelisin.



VAGONLARI DOLDUR

Son vagonda verilen sayıdan başlayıp verilen işlemleri yaparak bütün vagonları doldurabilir misin? Her trende son bulduğun vagonu aşağıdan işaretlemelisin.

$$\boxed{10} \xrightarrow{-4} \boxed{} \xrightarrow{-1} \boxed{} \xrightarrow{+10} \boxed{} \xrightarrow{+4} \boxed{} \xrightarrow{-10} \boxed{} \xrightarrow{+7} \boxed{} \rightarrow 16$$

$$\boxed{3} \xrightarrow{-2} \boxed{} \xrightarrow{+6} \boxed{} \xrightarrow{+4} \boxed{} \xrightarrow{-7} \boxed{} \xrightarrow{+9} \boxed{} \xrightarrow{-3} \boxed{} \rightarrow 10$$

$$\boxed{8} \xrightarrow{+10} \boxed{} \xrightarrow{-2} \boxed{} \xrightarrow{+1} \boxed{} \xrightarrow{-5} \boxed{} \xrightarrow{-1} \boxed{} \xrightarrow{+7} \boxed{} \rightarrow 18$$

$$\boxed{9} \xrightarrow{-7} \boxed{} \xrightarrow{+5} \boxed{} \xrightarrow{+5} \boxed{} \xrightarrow{-1} \boxed{} \xrightarrow{+3} \boxed{} \xrightarrow{-2} \boxed{} \rightarrow 12$$

18 12 10 6 16

VAGONLARI DOLDUR

Son vagonda verilen sayıdan başlayıp verilen işlemleri yaparak bütün vagonları doldurabilir misin? Her trende son bulduğun vagonu aşağıdan işaretlemelisin.

$$\boxed{8} \xrightarrow{+7} \boxed{} \xrightarrow{-8} \boxed{} \xrightarrow{-1} \boxed{} \xrightarrow{-3} \boxed{} \xrightarrow{-1} \boxed{} \xrightarrow{+2} \boxed{} \rightarrow 4$$

$$\boxed{5} \xrightarrow{-3} \boxed{} \xrightarrow{+1} \boxed{} \xrightarrow{-2} \boxed{} \xrightarrow{+5} \boxed{} \xrightarrow{-3} \boxed{} \xrightarrow{-1} \boxed{} \rightarrow 2$$

$$\boxed{5} \xrightarrow{-2} \boxed{} \xrightarrow{+7} \boxed{} \xrightarrow{-3} \boxed{} \xrightarrow{-1} \boxed{} \xrightarrow{-4} \boxed{} \xrightarrow{-1} \boxed{} \rightarrow 1$$

$$\boxed{3} \xrightarrow{-1} \boxed{} \xrightarrow{+2} \boxed{} \xrightarrow{-1} \boxed{} \xrightarrow{+10} \boxed{} \xrightarrow{+4} \boxed{} \xrightarrow{-7} \boxed{} \rightarrow 10$$

1 22 10 2 4