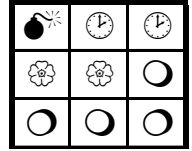


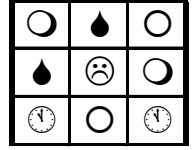
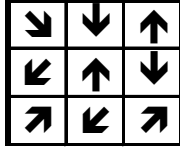
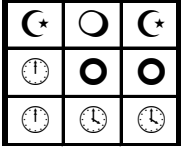
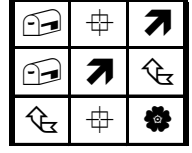

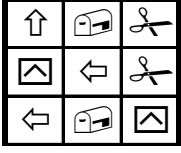




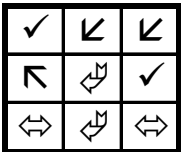

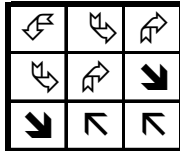


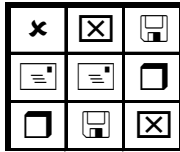

EŞİ OLMAYANI BUL

Aşağıdaki her bir tabloda eş olmayan şekli bulun ve işaretleyin.



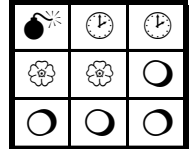


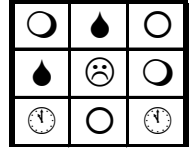
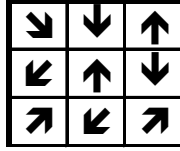
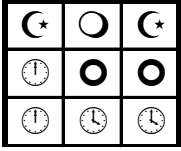
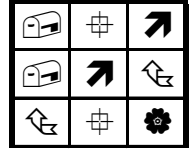
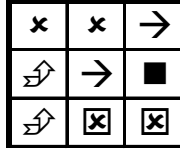
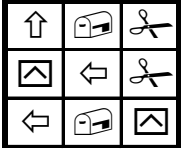
EŞİ OLMAYANI BUL

Aşağıdaki her bir tabloda eş olmayan şekli bulun ve işaretleyin.



EŞİ OLMAYANI BUL

Aşağıdaki her bir tabloda eş olmayan şekli bulun ve işaretleyin.



EŞİ OLMAYANI BUL

Aşağıdaki her bir tabloda eş olmayan şekli bulun ve işaretleyin.

