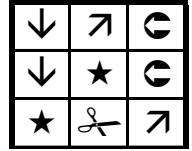

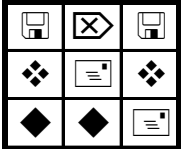

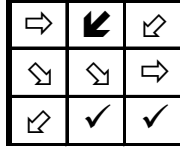

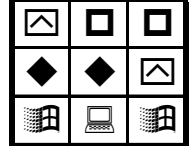
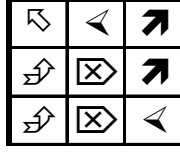
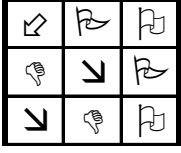


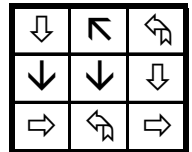

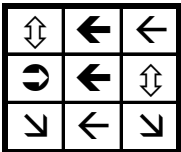
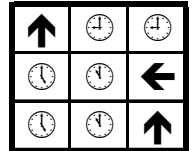

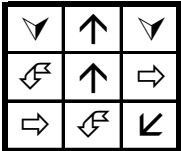
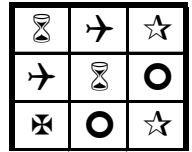

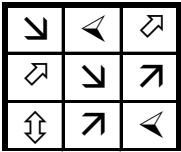
## EŞİ OLMAYANI BUL

Aşağıdaki her bir tabloda eş olmayan şekli bulun ve işaretleyin.



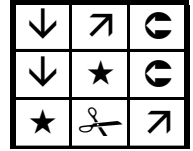

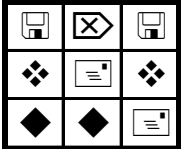
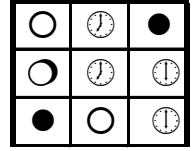
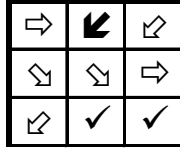

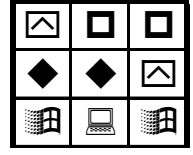
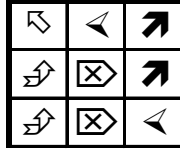
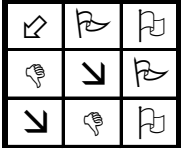
## EŞİ OLMAYANI BUL

Aşağıdaki her bir tabloda eş olmayan şekli bulun ve işaretleyin.



## EŞİ OLMAYANI BUL

Aşağıdaki her bir tabloda eş olmayan şekli bulun ve işaretleyin.



## EŞİ OLMAYANI BUL

Aşağıdaki her bir tabloda eş olmayan şekli bulun ve işaretleyin.

