

















ŞEKİLLİ TOPLAMA



















	+		=
	+		=
	+		=
	+		=

	+		=
	+		=
	+		=
	+		=

ŞEKİLLİ TOPLAMA



	+		=
	+		=
	+		=
	+		=

	+		=
	+		=
	+		=
	+		=

ŞEKİLLİ TOPLAMA



$$\blacksquare + \bigcirc = 8$$

$$\blacklozenge + \bigcirc = 5$$

$$\blacksquare + \bigcirc = 15$$

$$\text{⊙} + \blacksquare = 13$$

$$\text{⊙} + \bigcirc = 6$$

$$\blacklozenge + \blacksquare = 9$$

$$\text{⊙} + \bullet = 12$$

$$\blacksquare + \bullet = 11$$

ŞEKİLLİ TOPLAMA



$$\bigcirc + \blacksquare = 12$$

$$\blacksquare + \bullet = 5$$

$$\text{⊙} + \bigcirc = 17$$

$$\text{⊙} + \blacklozenge = 15$$

$$\bullet + \text{⊙} = 8$$

$$\bigcirc + \bigcirc = 16$$

$$\text{⊙} + \blacksquare = 7$$

$$\text{⊙} + \blacksquare = 9$$