

















# ŞEKİLLİ TOPLAMA



















	+		=	.....
	+		=	.....
	+		=	.....
	+		=	.....

	+		=	.....
	+		=	.....
	+		=	.....
	+		=	.....

# ŞEKİLLİ TOPLAMA



	+		=	.....
	+		=	.....
	+		=	.....
	+		=	.....

	+		=	.....
	+		=	.....
	+		=	.....
	+		=	.....

## ŞEKİLLİ TOPLAMA



$$\blacklozenge + \bigcirc = 15$$

$$\bigcirc + \blacklozenge = 12$$

$$\blacksquare + \bullet = 17$$

$$\bigcirc + \bigcirc = 14$$

$$\bigcirc + \bigcirc = 11$$

$$\blacksquare + \blacklozenge = 21$$

$$\bullet + \bigcirc = 8$$

$$\bigcirc + \bigcirc = 9$$

## ŞEKİLLİ TOPLAMA



$$\bigcirc + \blacklozenge = 18$$

$$\blacklozenge + \bigcirc = 16$$

$$\bigcirc + \bullet = 9$$

$$\bullet + \blacklozenge = 17$$

$$\blacklozenge + \blacksquare = 21$$

$$\bigcirc + \bigcirc = 10$$

$$\bigcirc + \bigcirc = 11$$

$$\bigcirc + \bigcirc = 15$$