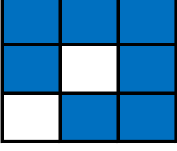


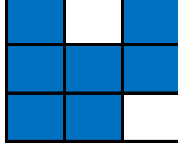
Tablo Tamamlama (Kolay Seviye - 3x3)

Birbirlerini tamamlayan tabloları tablo numaralarını kullanarak eşleştirin.

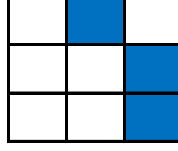
1. Tablo



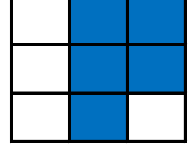
2. Tablo



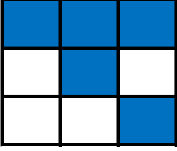
3. Tablo



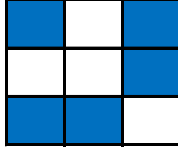
4. Tablo



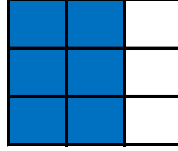
5. Tablo



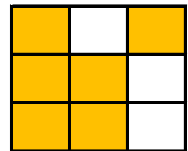
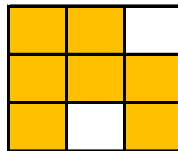
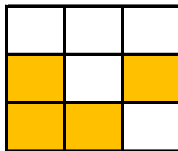
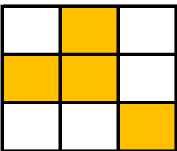
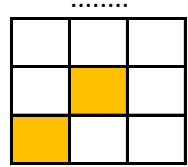
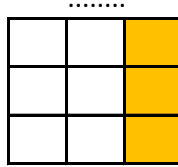
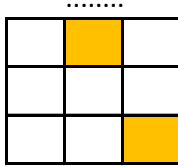
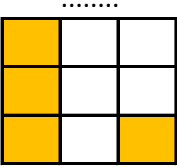
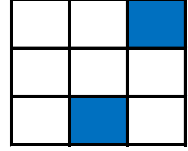
6. Tablo



7. Tablo



8. Tablo



Tablo Tamamlama (Kolay Seviye - 3x3)

Birbirlerini tamamlayan tabloları tablo numaralarını kullanarak eşleştirin.

1. Tablo

■	■	■
■	□	□
□	■	■

2. Tablo

■	□	■
■	■	■
■	■	□

3. Tablo

□	■	□
□	□	■
□	□	■

4. Tablo

□	■	■
□	■	■
□	■	□

5. Tablo

■	■	■
□	■	□
□	□	■

6. Tablo

■	□	■
□	□	■
■	■	□

7. Tablo

■	■	□
■	■	□
■	■	□

8. Tablo

□	□	■
□	□	□
□	■	□

4. Tablo

■	□	□
■	□	□
■	□	■

2. Tablo

□	■	□
□	□	□
□	□	■

7. Tablo

□	□	■
□	□	■
□	□	■

1. Tablo

□	□	□
□	■	□
■	□	□

6. Tablo

□	■	□
■	■	□
□	□	■

5. Tablo

□	□	□
■	□	■
■	■	□

8. Tablo

■	■	□
■	■	■
■	□	■

3. Tablo

■	□	■
■	■	□
■	■	□