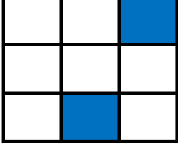


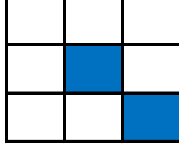
Tablo Tamamlama (Kolay Seviye - 3x3)

Birbirlerini tamamlayan tabloları tablo numaralarını kullanarak eşleştirin.

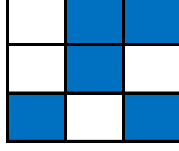
1. Tablo



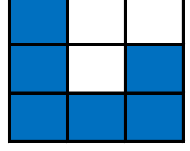
2. Tablo



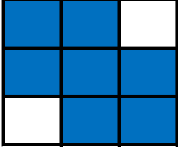
3. Tablo



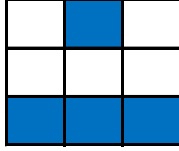
4. Tablo



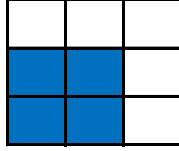
5. Tablo



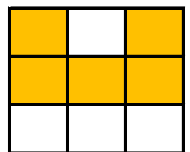
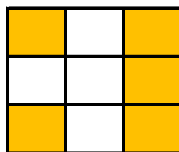
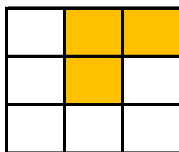
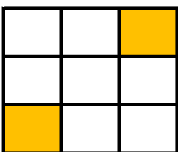
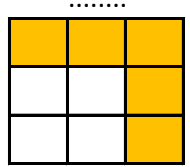
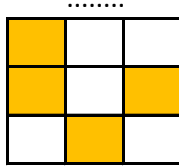
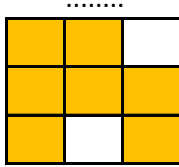
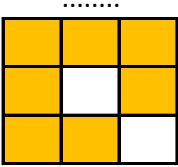
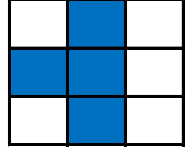
6. Tablo



7. Tablo



8. Tablo



Tablo Tamamlama (Kolay Seviye - 3x3)

Birbirlerini tamamlayan tabloları tablo numaralarını kullanarak eşleştirin.

1. Tablo

		■
	■	

2. Tablo

	■	
		■

3. Tablo

	■	■
	■	
■		■

4. Tablo

■		
■		■
■	■	■

5. Tablo

■	■	
■	■	■
	■	■

6. Tablo

	■	
■	■	■

7. Tablo

■	■	
■	■	

8. Tablo

	■	
■	■	
	■	

2. Tablo

■	■	■
■		■
■	■	

1. Tablo

■	■	
■	■	■
■		■

3. Tablo

■		
■		■
	■	

7. Tablo

■	■	■
		■
		■

5. Tablo

		■
■		

4. Tablo

	■	■
	■	

8. Tablo

■		■
		■
■		■

6. Tablo

■		■
■	■	■